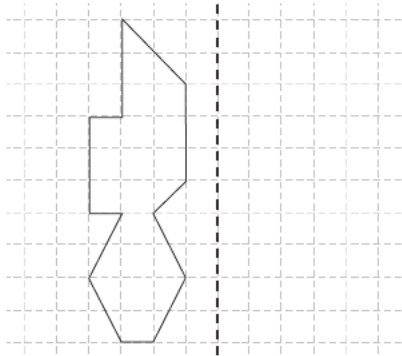


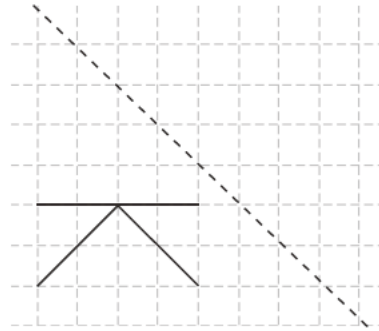
Symmetry and Transformation Part 2

7. Draw the images of the figures if the original figures were reflected along the dotted lines.

(a)

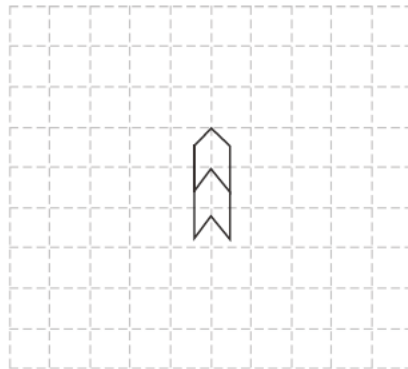


(b)

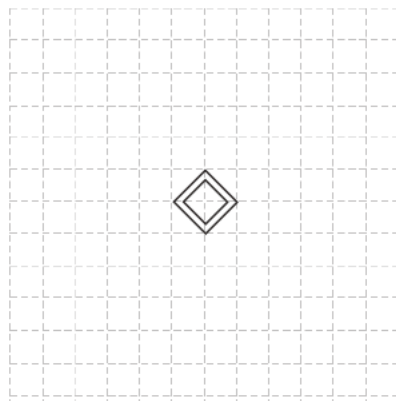


10. Draw the images of the original figures with the given translations.

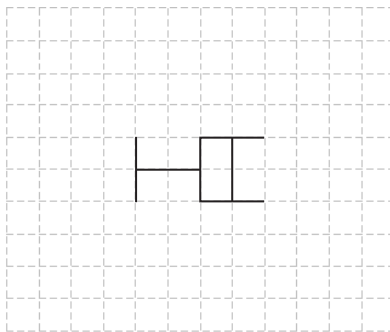
(a) 3 units upward and 4 units to the right



(b) 2 units downward and 5 units to the left



(c) 4 units upward and 1 unit to the left



11. Draw the image of each figure after rotating it clockwise about point “ \times ” by 90° .

(a) \times B

(b) H \times

(c) W \times