

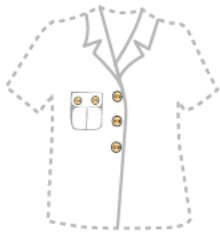


## 周界 (二) Perimeter (II)

用顏色筆畫出以下物件的周界：

Colour the perimeter of the following objects :


①



②



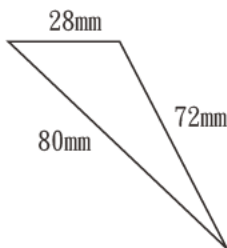
③



計算：

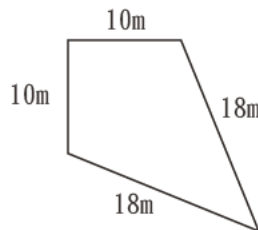
Calculating :

①



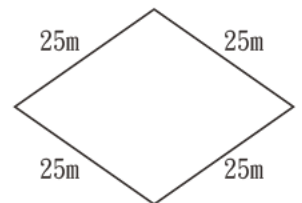
周界  
Perimeter = \_\_\_\_\_

②



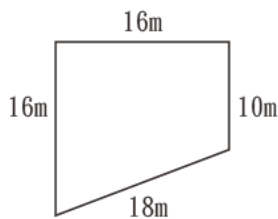
周界  
Perimeter = \_\_\_\_\_

③



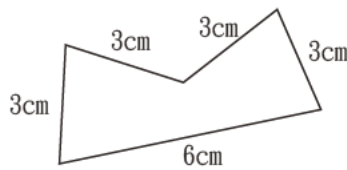
周界  
Perimeter = \_\_\_\_\_

④



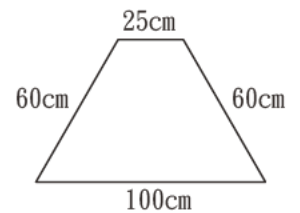
周界  
Perimeter = \_\_\_\_\_

⑤



周界  
Perimeter = \_\_\_\_\_

⑥



周界  
Perimeter = \_\_\_\_\_

正方形的周界=邊長×4

Perimeter of square=Side length×4

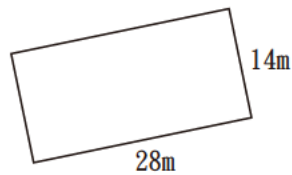
長方形的周界=(長+闊)×2

Perimeter of rectangle=(Length + Width)×2

計算：

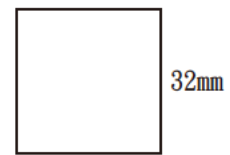
Calculating：

①



周界 = \_\_\_\_\_  
Perimeter = \_\_\_\_\_  
= \_\_\_\_\_

②




周界 = \_\_\_\_\_  
Perimeter = \_\_\_\_\_  
= \_\_\_\_\_

③

求邊長。

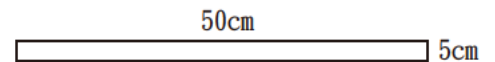
Find the side length.



周界 = 64cm  
Perimeter = 64cm

邊長 = \_\_\_\_\_  
Side length = \_\_\_\_\_  
= \_\_\_\_\_

④

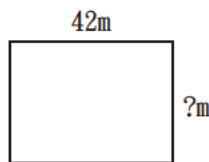


周界 = \_\_\_\_\_  
Perimeter = \_\_\_\_\_  
= \_\_\_\_\_

⑤

求闊。

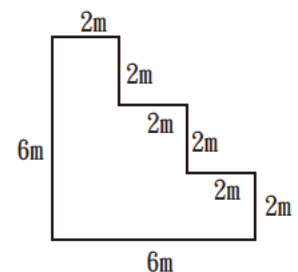
Find the width.



周界 = 148m  
Perimeter = 148m

闊 = \_\_\_\_\_  
Width = \_\_\_\_\_  
= \_\_\_\_\_

⑥

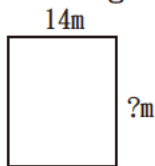


周界 = \_\_\_\_\_  
Perimeter = \_\_\_\_\_  
= \_\_\_\_\_

⑦

求長。

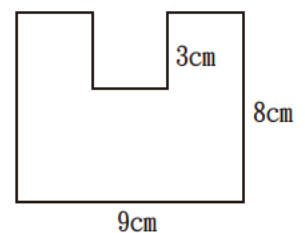
Find the length.



周界 = 62m  
Perimeter = 62m

長 = \_\_\_\_\_  
Length = \_\_\_\_\_  
= \_\_\_\_\_

⑧



周界 = \_\_\_\_\_  
Perimeter = \_\_\_\_\_  
= \_\_\_\_\_