



周界 Perimeter

用顏色筆畫出以下物件的周界：

Colour the perimeter of the following objects :

①



②



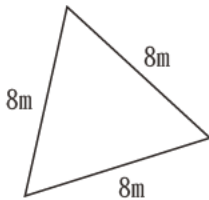
③



計算：

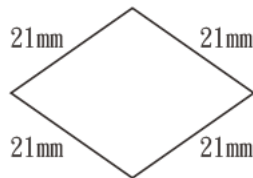
Calculating :

①



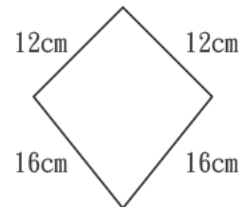
周界 = 24 m
Perimeter = 24 m

②



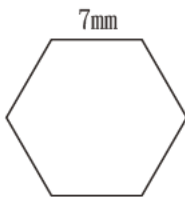
周界 = 84 mm
Perimeter = 84 mm

③



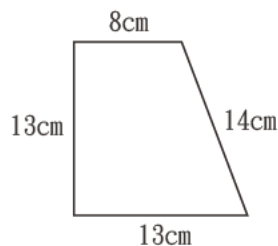
周界 = 56 cm
Perimeter = 56 cm

④



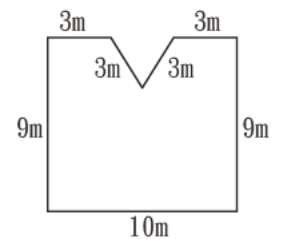
周界 = 42 mm
Perimeter = 42 mm

⑤



周界 = 48 cm
Perimeter = 48 cm

⑥



周界 = 40 m
Perimeter = 40 m

正方形的周界=邊長×4

Perimeter of square=Side length×4

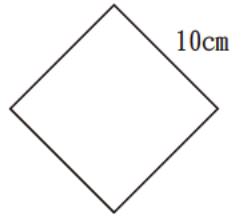
長方形的周界=(長+闊)×2

Perimeter of rectangle=(Length + Width)×2

計算：

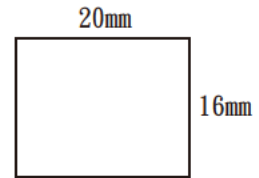
Calculating：

①



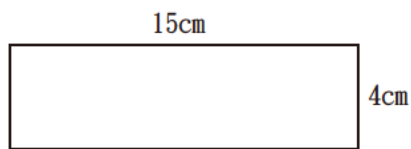
$$\begin{aligned} \text{周界} &= 10 \times 4 \\ \text{Perimeter} &= \underline{40 \text{ cm}} \end{aligned}$$

②



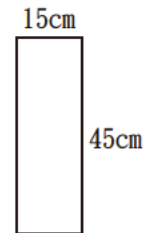
$$\begin{aligned} \text{周界} &= (20 + 16) \times 2 \\ \text{Perimeter} &= \underline{72 \text{ mm}} \end{aligned}$$

③



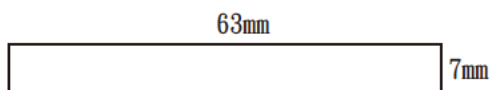
$$\begin{aligned} \text{周界} &= (15 + 4) \times 2 \\ \text{Perimeter} &= \underline{38 \text{ cm}} \end{aligned}$$

④




$$\begin{aligned} \text{周界} &= (15 + 45) \times 2 \\ \text{Perimeter} &= \underline{120 \text{ cm}} \end{aligned}$$

⑤



$$\begin{aligned} \text{周界} &= (63 + 7) \times 2 \\ \text{Perimeter} &= \underline{140 \text{ mm}} \end{aligned}$$

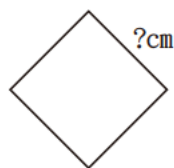
⑥



$$\begin{aligned} \text{周界} &= 25 \times 4 \\ \text{Perimeter} &= \underline{100 \text{ m}} \end{aligned}$$

★ 7 求邊長。

Find the side length.

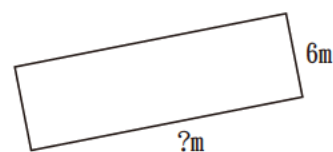


周界 = 84cm
Perimeter = 84cm

$$\begin{aligned} \text{邊長} &= 84 \div 4 \\ \text{Side length} &= \underline{21 \text{ cm}} \end{aligned}$$

★ 8 求長。

Find the length.



周界 = 46m
Perimeter = 46m

$$\begin{aligned} \text{長} &= 46 \div 2 - 6 \\ \text{Length} &= \underline{17 \text{ m}} \end{aligned}$$