



周界 Perimeter

用顏色筆畫出以下物件的周界：

Colour the perimeter of the following objects :

①



②



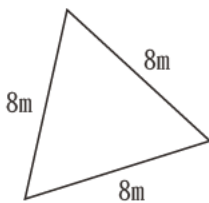
③



計算：

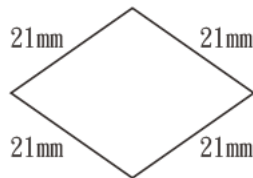
Calculating :

①



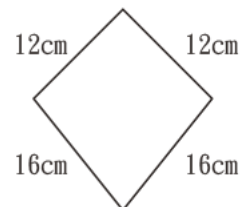
周界 = _____
Perimeter = _____

②



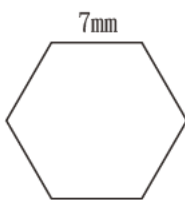
周界 = _____
Perimeter = _____

③



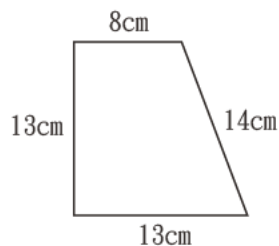
周界 = _____
Perimeter = _____

④



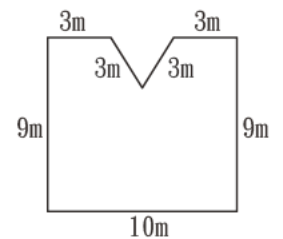
周界 = _____
Perimeter = _____

⑤



周界 = _____
Perimeter = _____

⑥



周界 = _____
Perimeter = _____

正方形的周界=邊長×4

Perimeter of square=Side length×4

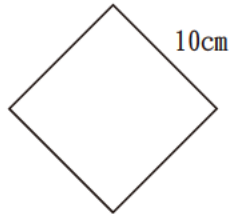
長方形的周界=(長+闊)×2

Perimeter of rectangle=(Length + Width)×2

計算：

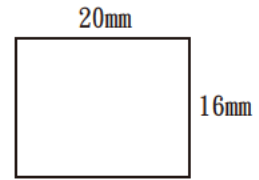
Calculating：

①



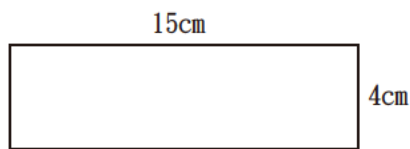
周界 = _____
Perimeter = _____
= _____

②



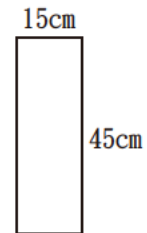
周界 = _____
Perimeter = _____
= _____

③



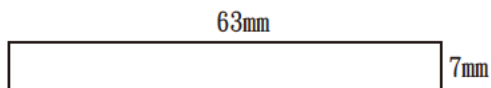
周界 = _____
Perimeter = _____
= _____

④




周界 = _____
Perimeter = _____
= _____

⑤



周界 = _____
Perimeter = _____
= _____

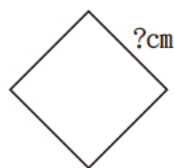
⑥



周界 = _____
Perimeter = _____
= _____

★ 7 求邊長。

Find the side length.

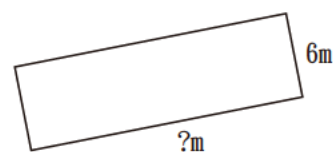


周界 = 84cm
Perimeter = 84cm

邊長 = _____
Side length = _____
= _____

★ 8 求長。

Find the length.



周界 = 46m
Perimeter = 46m

長 = _____
Length = _____
= _____