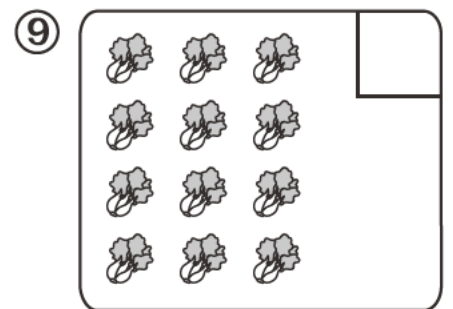



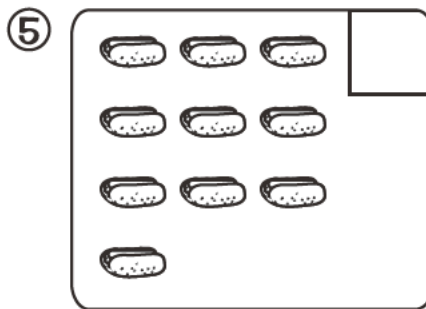
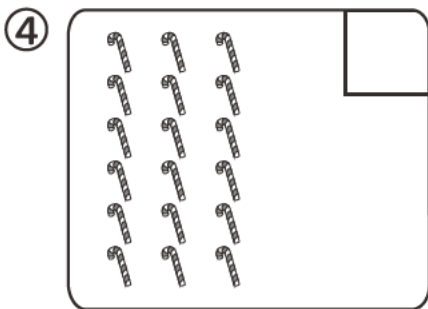
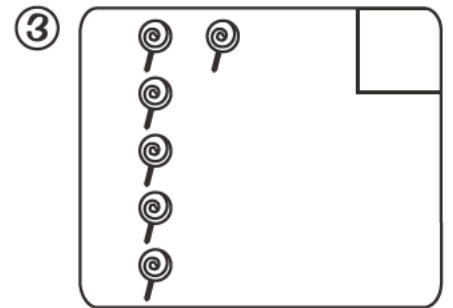

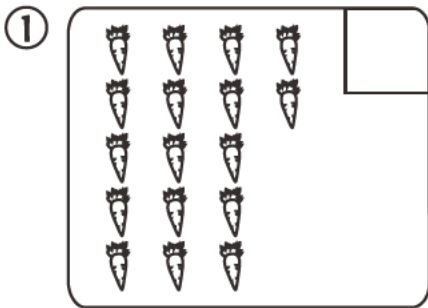




20以內的數

Numbers within 20


數一數：
Counting：




填空，並把適當的圖形填色：


Fill in the blanks and colour the correct figures :




a) 上方共有_____個 。

There are _____  in total.


b) 把第三個  填色。


Colour the third .



a) 上方共有_____個 。

There are _____  altogether.

b) 把第五個  填色。

Colour the fifth .





a) 從左面數起，第_____至第_____個是 。


Counting from the left, the _____ th to _____ th are .

b) 從右面數起，第_____至第_____個是 。

Counting from the right, the _____ rd to _____ th are .


在  裏寫上「>」、「<」或「=」：


Fill “>”, “<” or “=” in the  :


① 8  13


② 17  12

③ 1  11

④ 14  14


⑤ $8-5$  5


⑥ 18  8


⑦ $9+2$  11

⑧ $8+7$  $8-7$

⑨ $5+4$  $4+5$

⑩ $8-2$  8

⑪ $9-6$  $9+6$

⑫ $7+3$  $9+1$